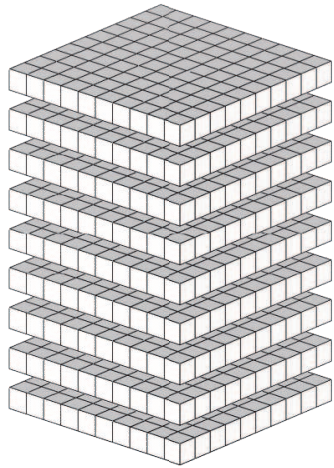
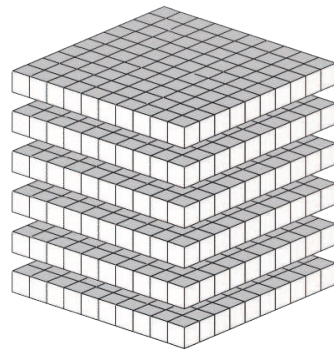


Base Ten Blocks—Counting Flats (A)

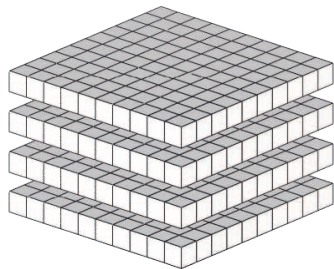
Instructions: The value of each flat is 100. What is the value of each set of flats?



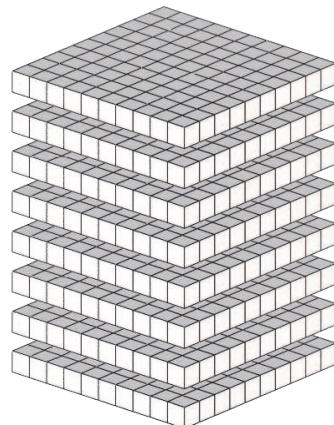
The value of the flats is _____.



The value of the flats is _____.



The value of the flats is _____.



The value of the flats is _____.